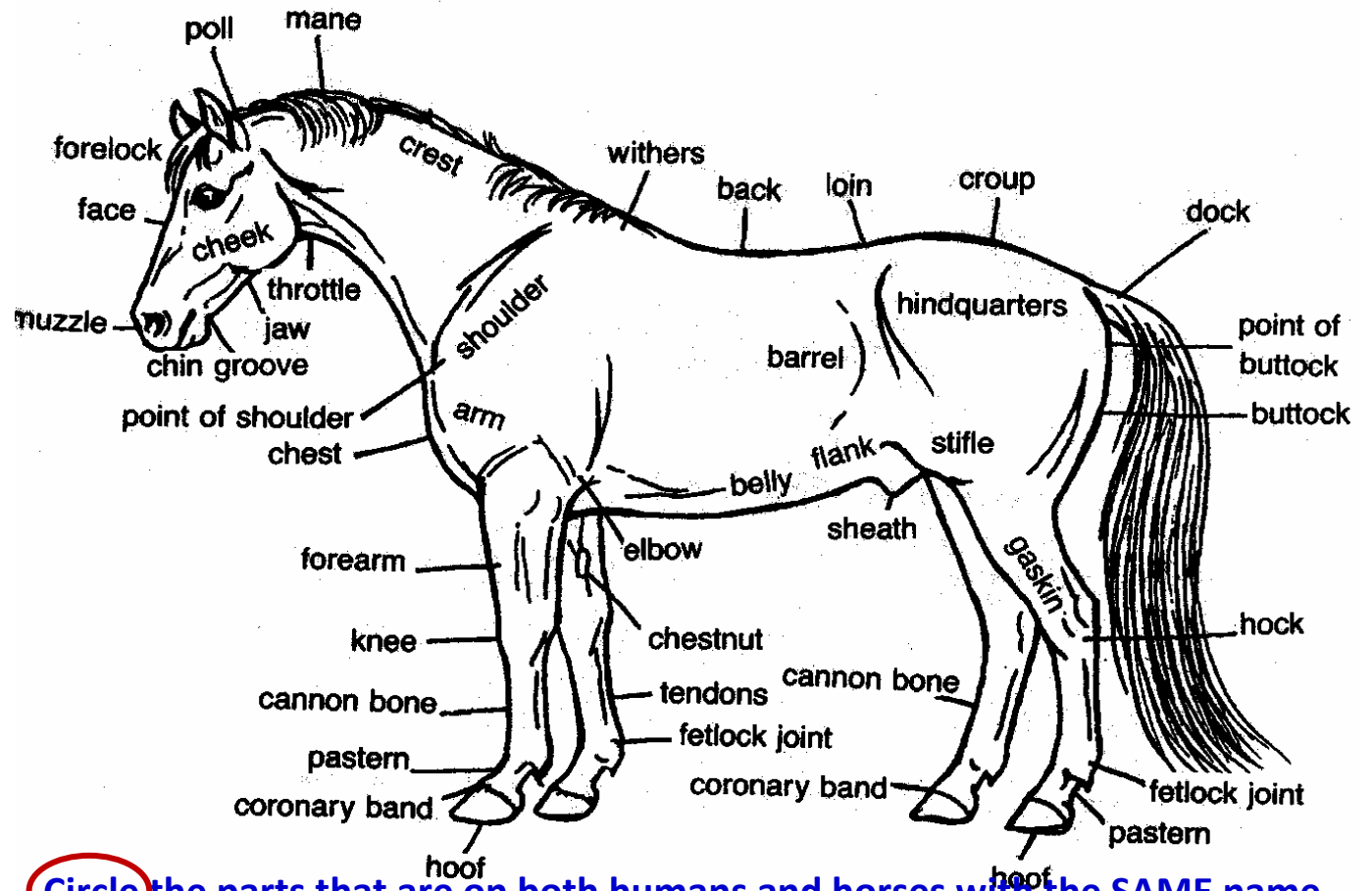


Name: _____

Body Parts We Both Have

Date: _____

Write the SAME NAME parts



Circle the parts that are on both humans and horses with the SAME name.

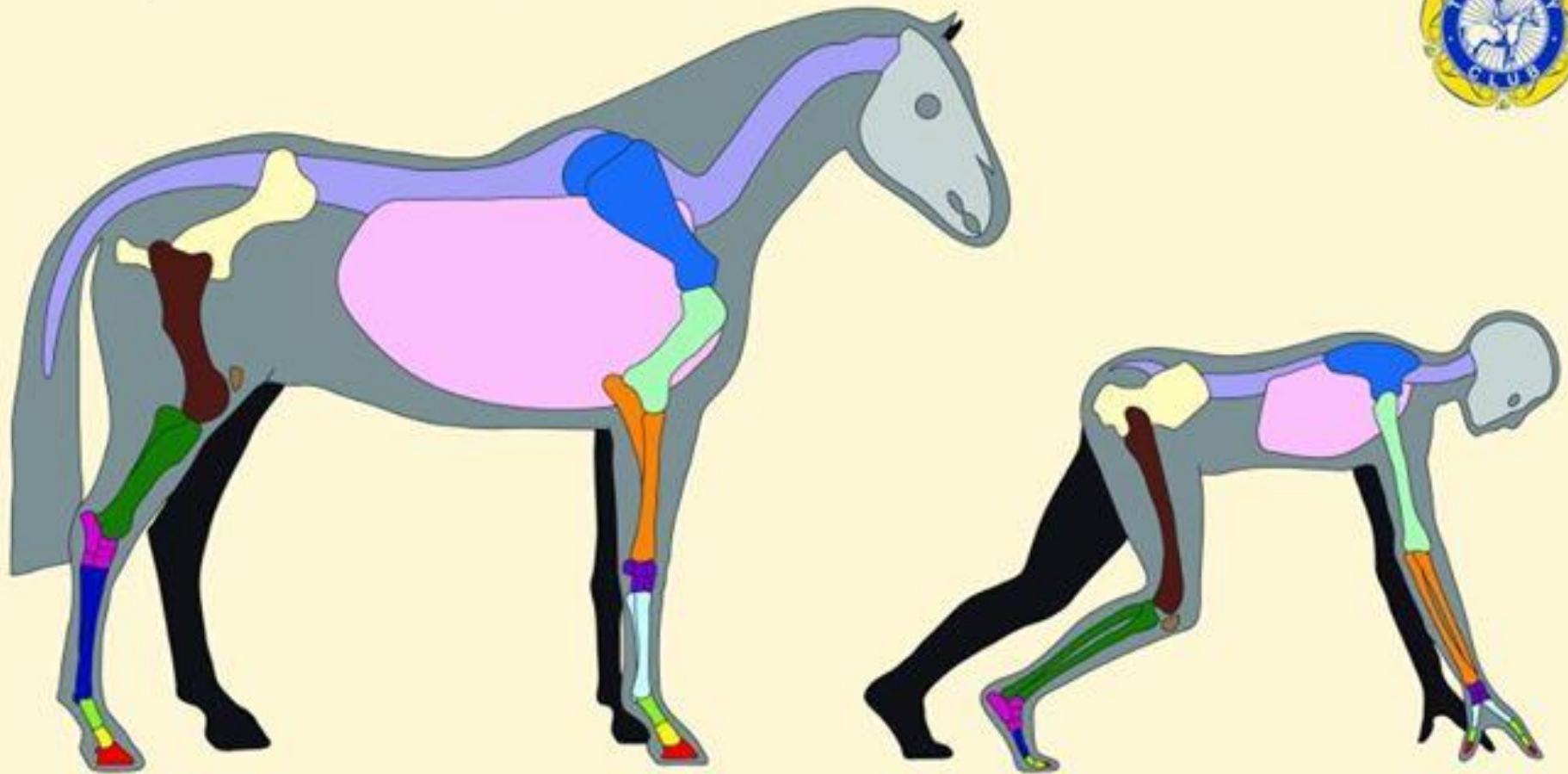
Write the parts both humans and horses have with DIFFERENT Names

HORSE	HUMAN	HORSE	HUMAN
	Bangs		Foot
	Nose		Callus
	Throat		Waist
	Wrist		Hair
	Ankle		Top of head

For Discussion: Graphic provided by The Pony Club, UK

Horse and Human Common Parts

A Comparison of Bone Structures

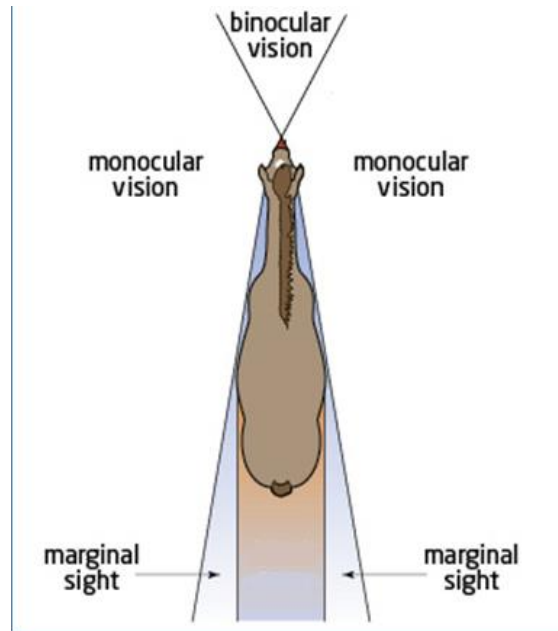


	Ankle	Femur	Tibia and Fibula	Fingers / Toes	Fingers / Toes	Fingers / Toes	Humerus	Metacarpal bones	Metatarsal bones	Patella	Pelvis	Radius and Ulna	Ribcage	Scapula	Skull	Spine	Wrist
HUMAN	[Pink]	[Brown]	[Green]	[Light Green]	[Yellow]	[Red]	[Light Blue]	[Light Blue]	[Dark Blue]	[Brown]	[Yellow]	[Orange]	[Pink]	[Blue]	[Grey]	[Purple]	[Purple]
HORSE	Hock	Femur	Tibia and Fibula	Long pastern bone	Short pastern bone	Pedal bone	Humerus	Cannon bone	Hind cannon bone	Patella	Pelvis	Radius and Ulna	Ribcage	Scapula	Skull	Spine	Knee

Your Horse's Line of Sight

How many Blind Spots does a horse have? _____

Draw arrows to the horse's BLIND SPOTS →



How many blind spots does a human have? ____

What _____ See



What your _____ can see



USPC Rating Requirements: D3- Describe location of eyes and how this affects the mount's vision.